




April 15, 2020


Directions: Write the number sentence.



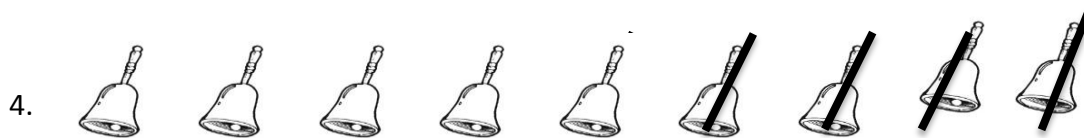
$$\square - \square = \square$$



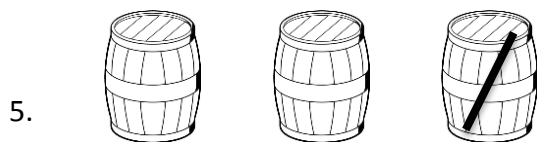
$$\square - \square = \square$$



$$\square - \square = \square$$



$$\square - \square = \square$$



$$\square - \square = \square$$

Directions: Find the difference.

a.  $6 - 2 =$

f.  $10 - 2 =$

b.  $5 - 4 =$

g.  $8 - 5 =$

c.  $4 - 1 =$

h.  $8 - 5 =$

d.  $6 - 5 =$

i.  $6 - 4 =$

e.  $5 - 3 =$

j.  $10 - 10 =$

Directions: Read the story problems below. Complete the number sentence.

1. Alex has 4 rabbits. 1 rabbit jumped over the log. How many rabbits were left?

$$\underline{\quad\quad} - \underline{\quad\quad} = \underline{\quad\quad}$$

2. Aling Rosa gave me 7 candies. I gave 2 candies to my playmate. How many candies were left with me?

$$\underline{\quad\quad} - \underline{\quad\quad} = \underline{\quad\quad}$$

3. There are 10 flowers in the garden. I picked 3 for Nanay Belen. How many flowers were left?

$$\underline{\quad\quad} - \underline{\quad\quad} = \underline{\quad\quad}$$

4. I have 10 coins. I gave 5 coins to a poor old man. How many coins were left with me?

$$\underline{\quad\quad} - \underline{\quad\quad} = \underline{\quad\quad}$$

5. There are 10 sailboats in the sea. Some sailed off. How many sailboats were left?

$$\underline{\quad\quad} - \underline{\quad\quad} = \underline{\quad\quad}$$



LA IMMACULADA CONCEPCION SCHOOL

PRESCHOOL

KINDER 1-SCIENCE

April 16, 2020

Directions: What are the needs of plants. Draw your answer.

1. 



4. 



2. 

5. 

3. 

Directions: Name the parts of a plant . Unscramble the letters . Write your answer on the lines.

1.   \_\_\_\_\_

2.   \_\_\_\_\_

3.   \_\_\_\_\_

4.   \_\_\_\_\_

5.   \_\_\_\_\_

Directions: Use old magazine cut and paste pictures that come from plants.



Directions: Do you eat vegetables? Draw

VEGETABLES I EAT	VEGETABLES I WILL LEARN TO EAT
1.	
2.	
3.	
4.	
5.	