




April 2, 2020

TOPIC: Crosshatching

Directions: Illustrate the three types of hatching (Linear, Cross, and Contoured hatching) on the jars below.



RUBRICS	5- EXCEEDS STANDARD	3-MEETS STANDARD	1-FAILS TPO MEET STANDARD
LINEAR HATCHING			
CROSS HATCHING			
CONTOURED HATCHING			
NEATNESS			


If you will describe your life in one line what kind of line will it be? Why?



April 1, 2020

TOPIC: Melodic Contour


Directions: Show the following melodic contours by drawing four whole notes.



Skip descending

Repetition


Step ascending




Leap movement

Step descending


Step ascending




Skip descending




Repetition




Step descending



Leap movement



Step descending



Skip ascending



LA IMMACULADA CONCEPCION SCHOOL
MIDDLE SCHOOL
GRADE 5 – ARLING PANLIPUNAN

March 30, 2020

PAKSA: Sinaunang Kabihasan, Kultura at Kagawiang Panlipunan

Panuto: Gumawa ng **TIME LINE** ng inyong mga gawain sa buong araw. Mula paggising hanggang bago matulog. Isulat ito sa isang buong papel.

Halimbawa:

6:00 - 7:00 – Nag-aalmusal kasama ang pamilya.

7:00 - 8:00 –

2. Suriin ang ginawang time line. Masasabi mo bang naging pruktibo ka sa araw na ito?
3. Anong gawain ang para sa iyo ay madali? Bakit?
4. Ano naman ang mahirap para sa iyo? Bakit.?
5. Ano ang inyong nararamdaman na ikaw ay naging bahagi sa mga gawaing bahay ng inyong pamilya?

March 31, 2020

Panuto: Suriin ang inyong mga kagamitan sa loob ng bahay. Magtala ng mga kagamitan o anumang bagay na naging impluwensiya ng mga sumusunod na dayuhan.

Halimbawa:

ARABE	TSINO	INDIAN	HAPONES
• Kalendaryo	• Tsinelas	• Kuwintas	• Katana
•	•	•	•
•	•	•	•
•	•	•	•

1. Ano-ano ang naging bunga ng pakikipagkalakalan ng ating mga ninuno sa mga dayuhan?
2. Sang-ayon ka ba sa paraan ng pakikipagkalakalan noon ng ating mga ninuno? Bakit?



LA IMMACULADA CONCEPCION SCHOOL
MIDDLE SCHOOL
GRADE 5 – ARALING PANLIPUNAN

April 1, 2020

Panuto: Sumulat ng iyong sariling talambuhay. Ilagay ang mga mahahalagang detalye tulad ng pangalan, kapanganakan, mga magulang, antas ng pag-aaral, atbp. Isulat ito sa isang buong papel.

April 2, 2020

Panuto: Gumawa ng **“Campaign Poster Slogan”** kung paano malunasan ang pagkalat ng **CORONA VIRUS** sa ating bansa at maging sa buong mundo. Kinakailangang orihinal ang iyong gawa, angkop sa paksa, at may sapat na kombinasyon ng kulay. Maaring gawin ito sa isang “oslo paper o puting kartolina (1/4).



TOPIC: Solid Figures

March 30, 2020

1. DIRECTIONS: Review how to get the following
 - a. Number of Faces of Solid Figures
 - b. Number of Vertices of Solid Figures
 - c. Number of Edges of Solid Figures

March 31, 2020

2. DIRECTIONS. Complete the table on a ONE WHOLE SHEET of paper. Follow the example given on the first row of the table.

SOLID FIGURE	NUMBER OF FACES	NUMBER OF VERTICES	NUMBER OF EDGES
CUBE	6	8	12
SQUARE PYRAMID	_____	_____	_____
TRIANGULAR PYRAMID	_____	_____	_____
SQUARE PRISM	_____	_____	_____
RECTANGULAR PRISM	_____	_____	_____
TRIANGULAR PRISM	_____	_____	_____
PENTAGONAL PRISM	_____	_____	_____


April 1 , 2020

3. DIRECTIONS: Review the following
 - a. Common Solid Figures
 - b. Shapes of Faces of Each Solid Figure
 - c. Formula for Surface Area of Each Solid Figure
 - d. Formula for Volume of Each Solid Figure



April 2, 2020

4. DIRECTIONS: Complete the table on a ONE WHOLE SHEET of paper. Follow the example given on the first row of the table.

FIGURE	NAME	FACES	SURFACE AREA	VOLUME
	CUBE	6 Squares	$6 \times s \times s$	$s \times s \times s$
_____	SPHERE		_____	_____
_____	CYLINDER	_____	_____	_____
_____	CONE		_____	_____
_____	SQUARE PRISM	_____	_____	_____
_____	RECTANGULAR PRISM	_____	_____	_____
_____	TRIANGULAR PRISM	_____	_____	_____
_____	SQUARE PYRAMID	_____	_____	_____
_____	RECTANGULAR PYRAMID	_____	_____	_____

April 3, 2020

5. DIRECTIONS: Memorize the table above. Ask for one of your family members to help you do this activity. Make sure to memorize everything especially the formulas for SURFACE AREA and VOLUME.



March 30, 2020

Directions: Answer the following questions. (Write the answer on one whole sheet of paper)

1. Why do people buy goods?

2. What are the method of buying goods?

3. Cite a situation where people can apply the different methods of buying goods.

March 31, 2020

Directions: Make a Plan of your dream Business (One whole sheet of Paper).

Use the guide for planning your business.

1. Capital for your dream Business (Amount ₱ _____)

2. Site (where the store is to be located) _____

3. Light and Ventilation

4. Cleanliness

5. Advertising (promoting your business)

6. Sales Person

7. Sales person

8. Business permit

April 1, 2020

Directions: Make an essay (Write your answer on a one whole sheet of Paper)

TOPIC: How to maintain Cleanliness in yourself and also to surroundings.

April 2, 2020

Directions: Make a reaction about the Bad effect of Covid-19 at least 10-15 sentences.

(Use one whole sheet of Paper)



LA IMMACULADA CONCEPCION SCHOOL
MIDDLE SCHOOL
GRADE 5 – ENGLISH

March 30, 2020

Directions: Fill out the chart with titles of written material for each purpose. Use any reference material that can be found at home.

<i>Purpose</i>	<i>Title of Any Written Material</i>	<i>Reference, page</i>
To convince	1. 2. 3.	
To criticize	1. 2. 3.	
To entertain	1. 2. 3.	
To explain	1. 2. 3.	
To inform	1. 2. 3.	
To instruct	1. 2. 3.	





LA IMMACULADA CONCEPCION SCHOOL
MIDDLE SCHOOL
GRADE 5 – ENGLISH

April 2, 2020

Storytellers often use various techniques in narrating stories. One technique is **storyboarding**. In this technique, the storytellers show illustrations of various events in the story. These illustrations are shown in the sequence in which they happen in the story.

Task: Prepare the illustration of the various events in the story that you have written through storyboarding.





LA IMMACULADA CONCEPCION SCHOOL
MIDDLE SCHOOL
GRADE 5 – FILIPINO

March 30, 2020

TOPIC: Pagbabalangkas

Directions: Panuto: Punan ang balangkas sa pamamagitan ng pag-interbyu ng iyong tatay o nanay. Isulat ang maikling tala ng kanyang buhay sa patlang. Pagkatapos, isulat nang patalata sa ibaba ang ulat tungkol sa isinagawang interbyu. Gawin ito sa isang buong papel.

- I. Pangalan: _____
- II. Kapanganakan: _____
Magulang: _____
Mga Kapatid: _____
- III. Edukasyon: _____
A. Elementarya: _____
B. Sekondarya: _____
C. Kolehiyo: _____
- IV. Naging Hanapbuhay: _____
- V. Gawain sa Kasalukuyan: _____
- VI: Panuntunan sa Buhay: _____

March 31, 2020

TOPIC: Paggawa ng Poster

Directions: Tapusin ang islogan na may tugma. Pagkatapos, gawin ito ng poster at ilagay sa bond paper.

KAPAG TUBIG ANG _____
LAHAT TAYO AY _____

April 1, 2020

TOPIC: Pagsusunod-sunod

Directions: Gumuhit ng tamang hakbang sa paghuhugas ng plato. Gamitin ang prosidyural na pagsusunod-sunod at ilagay ito sa isang buong papel.

April 2, 2020

TOPIC: Pagtatala

Directions: Basahing mabuti ang sitwasyon sa ibaba.

Mayroon kang mahigit dalawang buwan na bakasyon dahil sa Coronavirus disease -19 o Covid-19. Tinanong ka ng inyong mga magulang ng mga bagay na gusto mong gawin sa panahong ito. Paano mo gagamitin nang makabuluhan ang mahigit dalawang buwang bakasyon mo? Ilista sa malinis na papel ang mga gusto mong mangyari o gawin habang wala kang pasok sa paaralan. Magsulat ng hindi bababa sa 10 gawain.



March 30, 2020

Activity #1.

Directions: Read each item below. Tell what you will do in the following situations.

1. You find out that your classmates are cheating in class during your exam day.

2. Your poor neighbor's dog, Dimple, is sick due to malnutrition.

3. Your bestfriend was scolded by her parents. She is seeking shelter in your house in order to show her defiance and resentment for the scolding that she got.

March 31, 2020

Activity #2.

In the table below, list down the occasions when you were tempted to do something bad (left column), opposite which (middle column), write I DID IT if you went along the temptation, or write NO WAY if you resisted. Then specify on the rightmost column how you resisted or what you did to turn your act around.

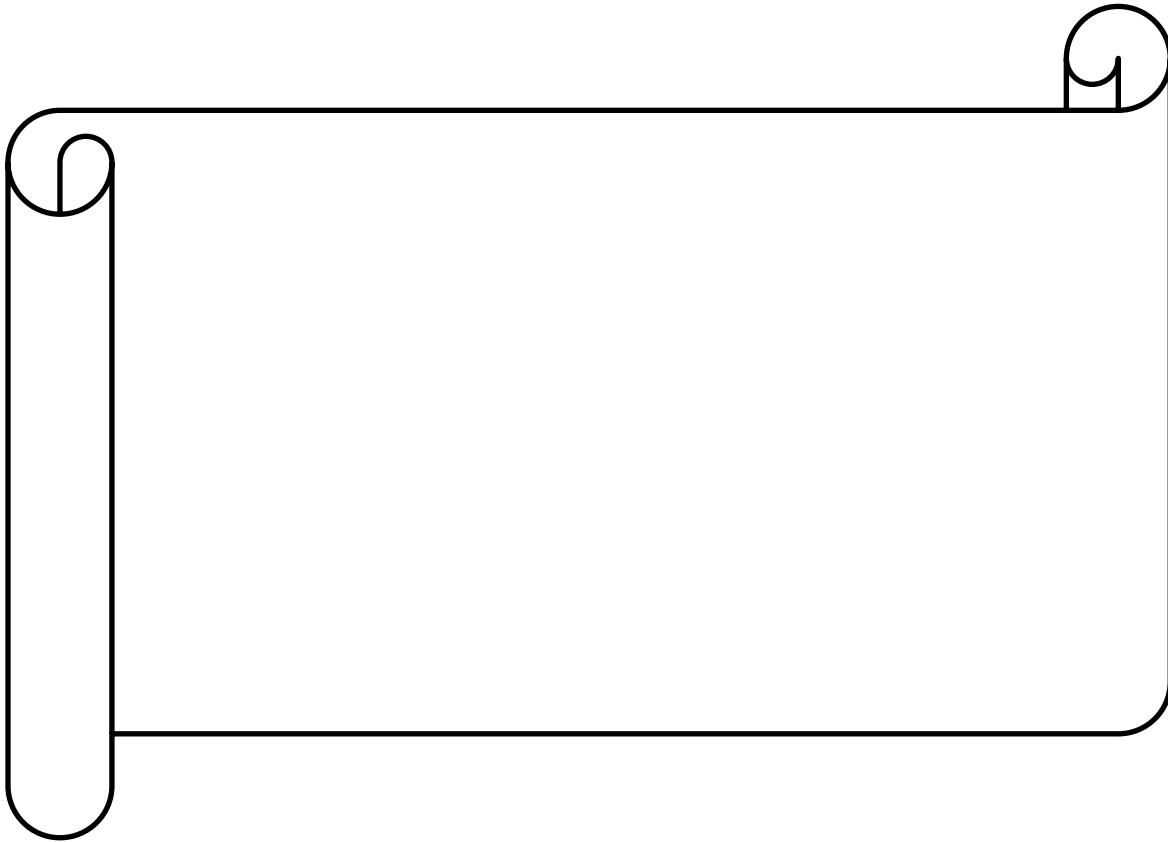
I WAS TEMPTED TO	I DID IT OR NO WAY	SO I DID THIS INSTEAD
1.		
2.		
3.		

4.		
5.		

April 1, 2020

Activity #3.

Directions: Write a prayer in the scroll. Tell God how Jesus has inspired you to do good.





LA IMMACULADA CONCEPCION SCHOOL
MIDDLE SCHOOL
GRADE 5 – COMPUTER – OPEN OFFICE IMPRESS

March 30, 2020

Directions: Watch these Open Office Impress tutorials on Youtube with the given links below:

https://www.youtube.com/watch?v=AdGk2_FV5Y0

<https://www.youtube.com/watch?v=7aBA7gNXyRI>

<https://www.youtube.com/watch?v=DYp0iujLFN4>

<https://www.youtube.com/watch?v=gcf-Z9GXfqc>

March 31, 2020

Directions: Following the given format about Open Office Impress, answer the questions below in at least three sentences.

Activity Title: _____.

1. How to add background design in slides using the Master pages Open Office Impress?

2. Describe the procedure on how to add a custom image as a background design?

3. How to apply effects using the Custom animation of Open Office Impress?



LA IMMACULADA CONCEPCION SCHOOL
MIDDLE SCHOOL
GRADE 5 – SCIENCE

March 30, 2020

Read and study Chapter 7 Lesson 4 of your reference book regarding “The Stars and the Universe”

Directions: Answer the Lesson Review on page 367 numbers 1-6.

Answer the Chapter Review on pages 368 numbers 1-10

March 31, 2020

In a short bond paper, draw the life cycle of a star. And answer the following questions.

1. How is the surface temperature of a star related to its color?
2. What may happen to massive stars at the end of their cycles?
3. Contrast a protostar and a white dwarf?

April 1, 2020

In a one whole sheet of paper, draw answer the following.

1. What is constellation?
2. How could you travel using stars as a guide?
3. What animals, characters, and objects would you choose to name constellations after?
4. Draw the following constellations.
 - a. Leo the Lion
 - b. Orion the Hunter

April 2, 2020

In a one whole sheet of paper, answer the following questions.

1. What is galaxy?
2. Besides shape, what other ways would you classify galaxies?
3. How can you tell from the direction of the universe’s expansion that the universe began at a single point?
4. Which is older- the universe or the Sun?

April 3, 2020

Answer the Chapter Review, Skills and Concepts on page 369 numbers 11-20.

Write your answer in a whole sheet of paper.



LA IMMACULADA CONCEPCION SCHOOL
MIDDLE SCHOOL
GRADE 5 – Physical Education

April 2, 2020

TITLE : Yes I Know!

To be aware of the different equipment in basketball. This will widen one's knowledge on the different equipment needed in basketball.

Direction: Draw 6 different equipment used in Basketball.
